



A. Check the correct answers and label the parts of the heart.

1. The oxygen-poor blood flows from the right ____ to the right ____ through the valves.

- (A) atrium; lung
- (B) atrium; ventricle
- (C) ventricle; atrium

2. The ____ is the main artery which carries blood out from the heart.

- (A) esophagus
- (B) trachea
- (C) aorta

3. The oxygen-rich blood comes from the ____ .

- (A) lungs
- (B) head
- (C) food


4. ____ open to let blood flow between the chambers.

- (A) Veins
- (B) Valves
- (C) Arteries

5. The ____ ventricle pumps blood to the lungs.

- (A) top
- (B) left
- (C) right

Label the parts of the heart.

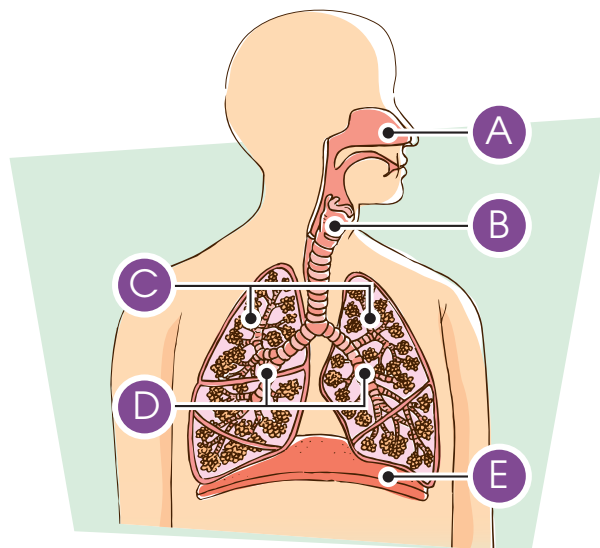


- (A) _____
- (B) _____
- (C) _____
- (D) _____

B. Match the parts of the systems with their names. Then describe what each system does.

Respiratory System

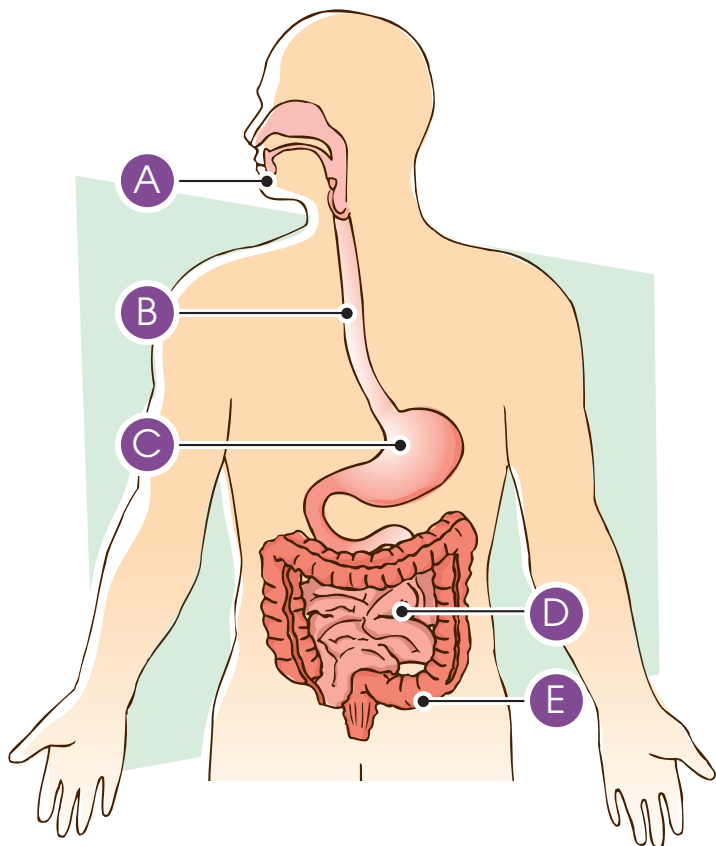
- | | |
|---------------------------------------|---------------------------------|
| <input type="radio"/> lungs | <input type="radio"/> trachea |
| <input type="radio"/> nose | <input type="radio"/> diaphragm |
| <input type="radio"/> bronchial tubes | |



What it does:

Digestive System

- | | |
|---------------------------------------|---------------------------------|
| <input type="radio"/> colon | <input type="radio"/> esophagus |
| <input type="radio"/> mouth | <input type="radio"/> stomach |
| <input type="radio"/> small intestine | |




What it does:

C. Label the bones in the skeletal system. Then name the described bones.

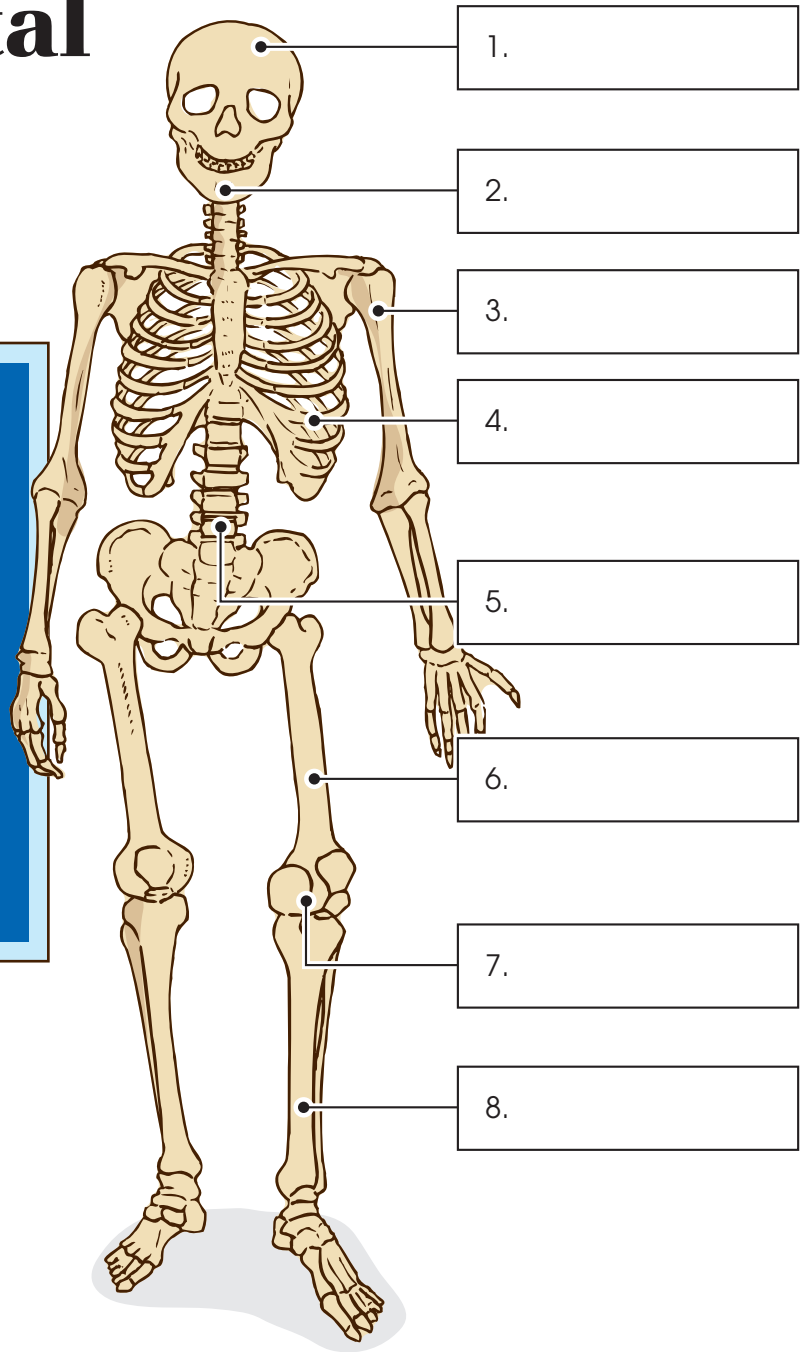
The Skeletal System



Science



humerus
vertebrae
skull
rib cage
femur
tibia
patella
mandible



the longest bone:

9. _____

protects the brain:

10. _____

protects the lungs:

11. _____

D. Match each part of the brain with its function.

The Brain

